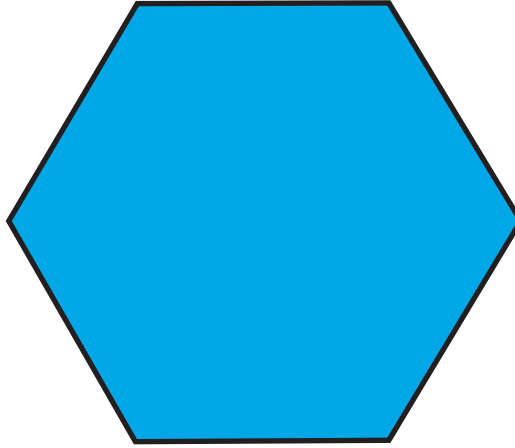




twinkl.com



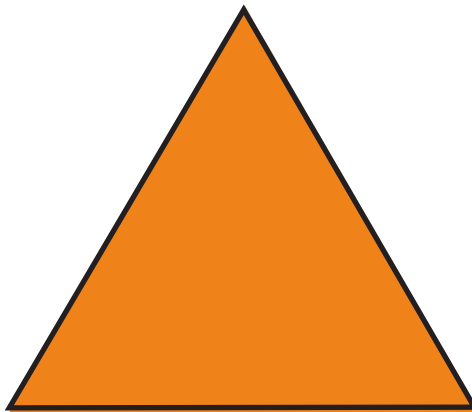
twinkl.com



twinkl.com




twinkl.com



twinkl.com



twinkl.com



I have 8 sides and  
8 vertices.

**What am I?**

twinkl.com

I have 4 straight  
sides and 4 vertices.  
All my sides are the  
same length.

**What am I?**

twinkl.com

I have 4 equal sides  
and 4 vertices. I am  
not a square.

**What am I?**

twinkl.com

I am a quadrilateral  
with four corners.  
I have 2 long sides  
and 2 short sides.

**What am I?**

twinkl.com

I have 5 straight  
sides and 5 vertices.

**What am I?**

twinkl.com

I have 3 sides and  
3 vertices.

**What am I?**

twinkl.com

**I have 6 sides and  
6 vertices.**

**What am I?**

twinkl.com

**I have 10 sides and  
10 vertices.**

**What am I?**

twinkl.com